
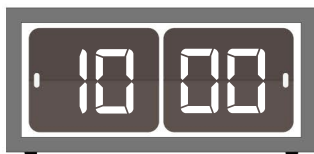
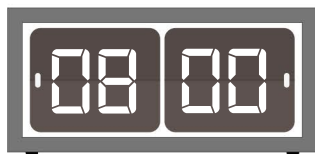





Zegary - pełne godziny




1. Dorysuj wskazówki na zegarach analogowych, tak aby wskazywały o godzinę później niż na zegarach cyfrowych.



2. Odczytaj godziny na zegarach i je zapisz.



3. Narysuj wskazówki na zegarach, tak aby wskazywały podane godziny.



osiemnasta

czwarta

pierwsza

trzecia